




Math Challenge




Name: _____

► Can you solve this? Observe carefully each illustration...

 $+$  $+$  $= 30$

 $+$

 $+$

 $+$  $+$  $= 20$




 $+$

 $+$

 $+$  $+$  $= 13$

 $+$

 $+$

 $+$  $+$  $= ?$

 $+$


 $+$

 $=$

Math Challenge

Name: _____


➡ Can you solve this? Observe carefully each illustration...


$$+ + = 30$$

_____ + _____ + _____

_____ + _____ + _____

_____ + _____ + _____


$$+ + = 20$$

_____ + _____ + _____

_____ + _____ + _____

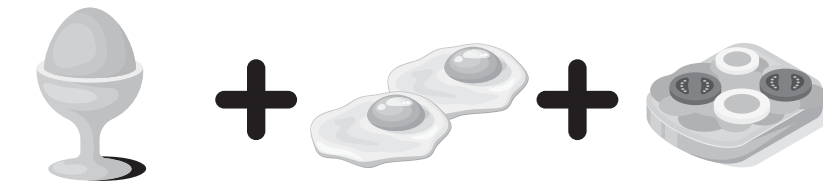
_____ + _____ + _____


$$+ + = 13$$

_____ + _____ + _____

_____ + _____ + _____

_____ + _____ + _____


$$+ + = ?$$

_____ + _____ + _____ = _____

_____ + _____ + _____ = _____

_____ + _____ + _____ = _____

Math Challenge

SKOOLGO
Solution

➡ Can you solve this? Observe carefully each illustration...

$$\begin{array}{c} \text{Hard-boiled egg} + \text{Hard-boiled egg} + \text{Hard-boiled egg} = 30 \\ \text{Hard-boiled egg} + \text{Hard-boiled egg} + \text{Hard-boiled egg} = 30 \end{array}$$

$$10 + 10 + 10$$

$$\begin{array}{c} \text{Hard-boiled egg} + \text{Hard-boiled egg} + \text{Fried egg} = 20 \\ \text{Hard-boiled egg} + \text{Hard-boiled egg} + \text{Fried egg} = 20 \end{array}$$

$$10 + 5 + 5$$

$$\begin{array}{c} \text{Fried egg} + \text{Fried egg} + \text{Fried egg} = 13 \\ \text{Fried egg} + \text{Fried egg} + \text{Fried egg} = 13 \end{array}$$

$$5 + 4 + 4$$

$$\begin{array}{c} \text{Hard-boiled egg} + \text{Hard-boiled egg} + \text{Fried egg} = ? \\ \text{Hard-boiled egg} + \text{Hard-boiled egg} + \text{Fried egg} = ? \end{array}$$

$$5 + 10 + 4 = 19$$